
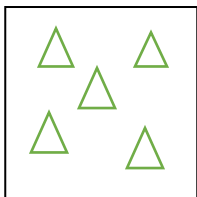


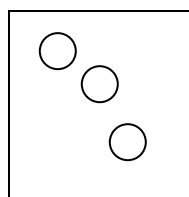


MEM-FIȘĂ DE LUCRU-AMELIORARE/DEZVOLTARE  
Numerația în centrul 0-10  
Clasa I

Prof.înv.primar Vleju Niculina

1. Scrieți numerele corespunzătoare sau desenați:

				
6		9	2	8

2. Completați cu numerele care lipsesc:

0 1 \_ \_ \_ \_ \_ \_ \_ ;  
10 9 \_ \_ \_ \_ \_ \_ \_ ;  
0 \_ 4 \_ \_ \_ 10;  
1 3 \_ \_ 9.

3. Ordonați crescător numerele: 8, 10, 4, 1, 3.

↗ .....

4. Ordonați descrescător numerele: 3, 0, 10, 9, 1, 4.

↘ .....

5. Compară numerele:

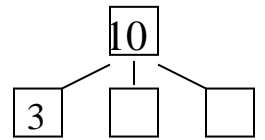
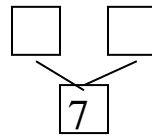
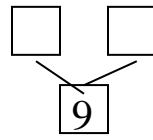
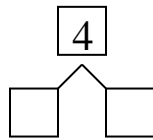
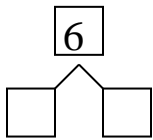
9 ○ 6    4 ○ 2    3 ○ 9    5 ○ 5    1 ○ 8

6. Găsiți vecinii numerelor:

\_\_\_ 2 \_\_\_  
\_\_\_ 8 \_\_\_  
\_\_\_ 5 \_\_\_

\_\_\_ 3 \_\_\_  
\_\_\_ 9 \_\_\_  
\_\_\_ 1 \_\_\_

7. Compune/ Descompune numerele:



8. Compune o problemă după imaginea dată!

